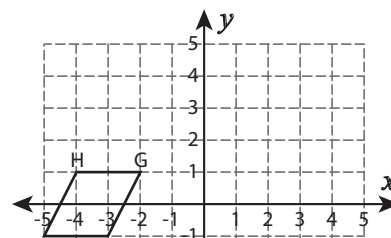
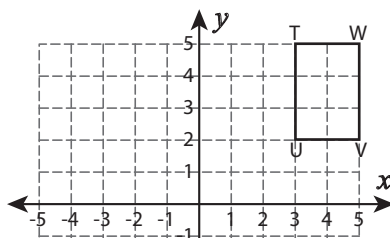
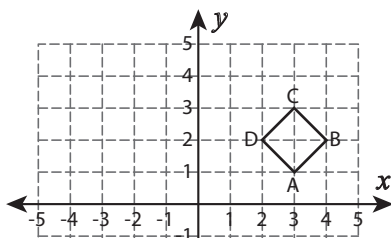


Translation

Graph the image of each figure after the given translation. Also write the coordinates of the image.

- 1) 4 units down and 6 units left 2) 8 units left and 7 units down 3) 7 units right



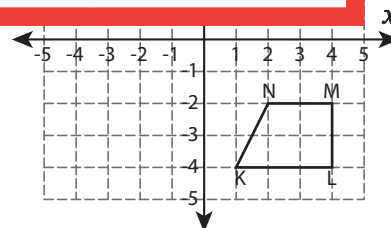
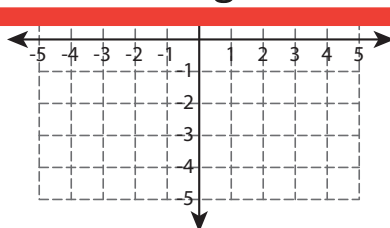
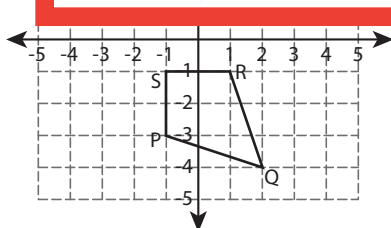
Preview

Become a member to unlock
unrestricted access to both printable
and online worksheets.



www.tutoringhour.com

- 4) 2 u



P'	
Q'	
R'	
S'	

A'	
B'	
C'	

K'	
L'	
M'	
N'	