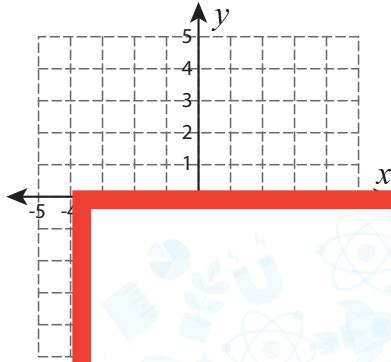


Transformation | Writing the Coordinates

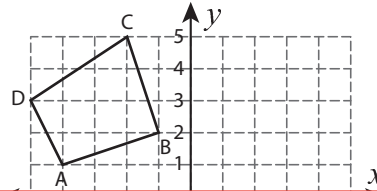
Graph the image of each figure after the given transformation. Also write the coordinates of the image.

1) 180° rotation about the origin



D'	
E'	

2) Reflection across the line $y = x$



A'	
B'	

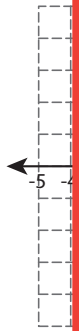
Preview

Become a member to unlock
unrestricted access to both printable
and online worksheets.

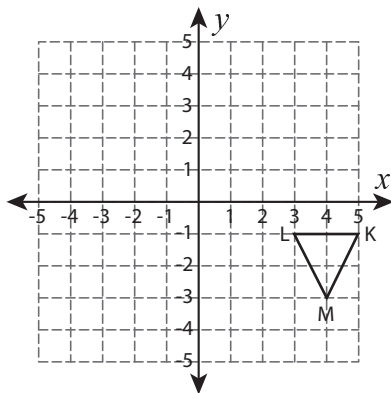


www.tutoringhour.com

3) Tra

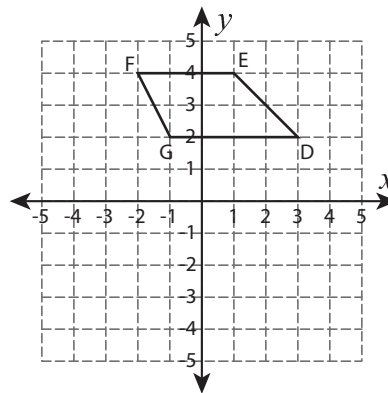


5) Reflection across the y-axis



K'	
L'	
M'	

6) Translate 2 units right and 6 units down.



D'	
E'	
F'	
G'	