

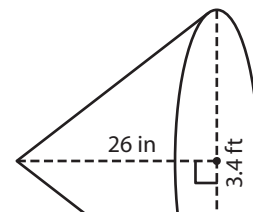
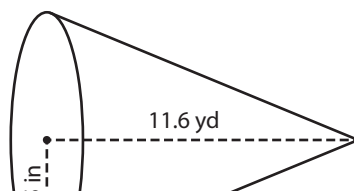
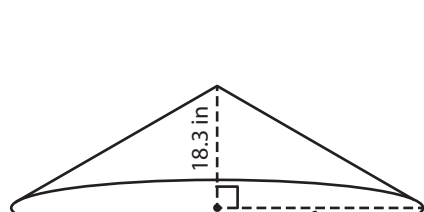
Volume of a Cone

A) Find the volume of each cone. Round your answer to two decimal places.
(Use 3.14 for π .)

1)

2)

3)



Preview

Become a member to unlock
unrestricted access to both printable
and online worksheets.



www.tutoringhour.com

in³

Volume = _____ in³

Volume = _____ ft³

C) If the height and diameter of a snow cone cup are 0.38 feet and 3 inches respectively, what is the volume of the cup? Round your answer to two decimal places. (Use 3.14 for π .)

_____ cubic inches