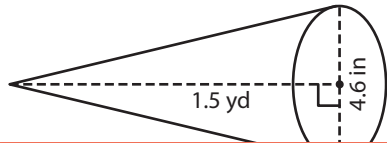


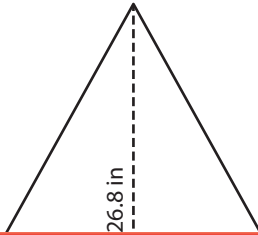
# Volume of a Cone

A) Find the volume of each cone. Round your answer to two decimal places.  
(Use 3.14 for  $\pi$ .)

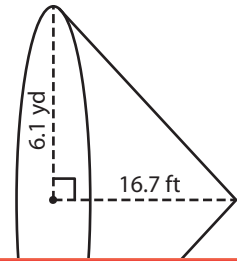
1)



2)



3)



# Preview

Become a member to unlock  
unrestricted access to both printable  
and online worksheets.



www.tutoringhour.com

yd<sup>3</sup>B) F  
a

1)

3)

Volume = \_\_\_\_\_ yd<sup>3</sup>

Volume = \_\_\_\_\_ in<sup>3</sup>

C) Sophia buys a conical pet cave for her puppy. If the height and diameter of the cave are 18.2 inches and 1.5 feet respectively, what is the volume of air within the pet cave? Round your answer to two decimal places. (Use 3.14 for  $\pi$ .)

\_\_\_\_\_ cubic feet