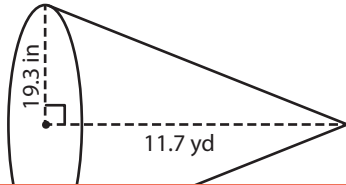


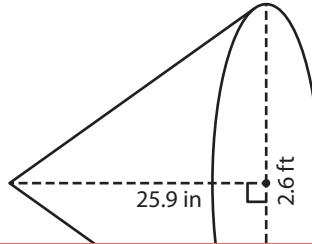
# Volume of a Cone

A) Find the volume of each cone. Round your answer to two decimal places.  
(Use 3.14 for  $\pi$ .)

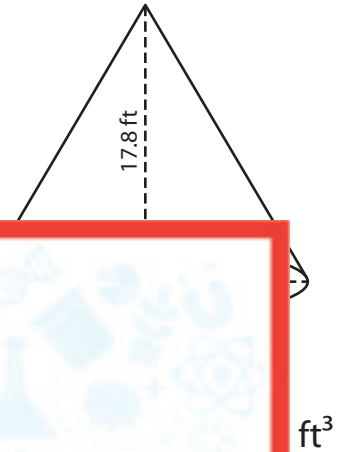
1)



2)



3)



# Preview

Become a member to unlock  
unrestricted access to both printable  
and online worksheets.



www.tutoringhour.com

ft<sup>3</sup>B) F  
a

1)

3)

Volume = \_\_\_\_\_ ft<sup>3</sup>

Volume = \_\_\_\_\_ yd<sup>3</sup>

C) A conical candle has a height and diameter of 0.8 feet and 0.7 inches respectively. Find the volume of the candle. Round your answer to two decimal places. (Use 3.14 for  $\pi$ .)

\_\_\_\_\_ cubic inches