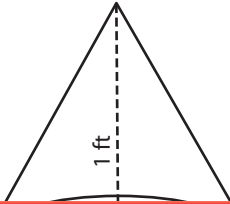


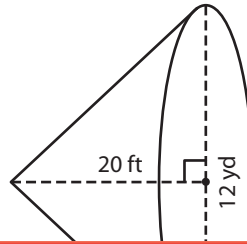
Volume of a Cone

A) Find the volume of each cone. Round your answer to two decimal places.
(Use 3.14 for π .)

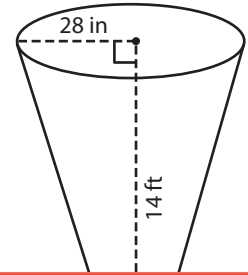
1)



2)



3)



Preview

ft³

B) F
a

1)

**Become a member to unlock
unrestricted access to both printable
and online worksheets.**



www.tutoringhour.com

3)

Volume = _____ ft³

Volume = _____ yd³

C) A conical building has a height of 60 feet and a radius of 5 yards. What is the volume of air in the building? Round your answer to two decimal places. (Use 3.14 for π .)

_____ cubic yards