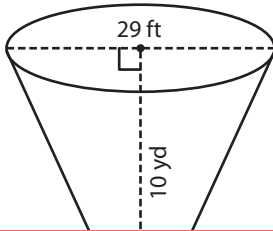


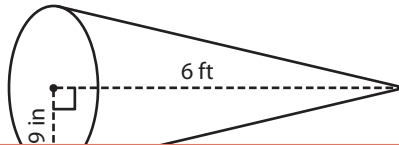
Volume of a Cone

A) Find the volume of each cone. Round your answer to two decimal places.
(Use 3.14 for π .)

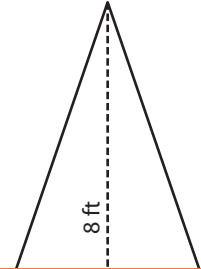
1)



2)



3)



Preview

Become a member to unlock
unrestricted access to both printable
and online worksheets.



www.tutoringhour.com

in³B) F
a

1)

3)

Volume = _____ yd³

Volume = _____ ft³

C) A metal steel is rolled in the shape of a cone. If the height of the cone is 1 foot and its radius 2 inches, find the volume of the steel cone. (Use 3.14 for π .)

_____ cubic inches