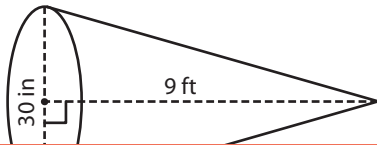


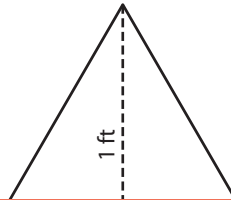
Volume of a Cone

A) Find the volume of each cone. Round your answer to two decimal places.
(Use 3.14 for π .)

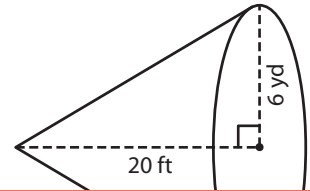
1)



2)



3)



Preview

ft³

B) F
a

1)

**Become a member to unlock
unrestricted access to both printable
and online worksheets.**



3)

www.tutoringhour.com

Volume = _____ yd³

Volume = _____ in³

C) A conical wall-mounted vase has a diameter of 5 inches. If the height of the vase is 1 foot, find the volume of the vase. (Use 3.14 for π .)

_____ cubic inches