
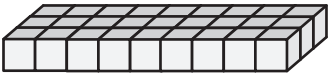


Volume | Counting Unit Cubes

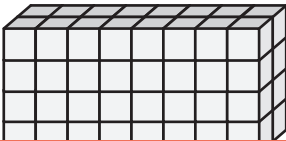
Count the unit cubes and find the volume of each rectangular prism.

 = 1 in³

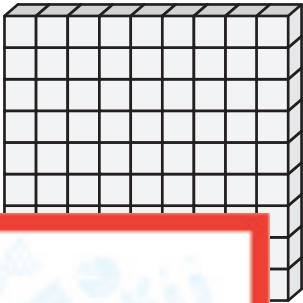
1)



2)



3)



Vol _____

4)

Vol _____


Preview

Become a member to unlock
unrestricted access to both printable
and online worksheets.




www.tutoringhour.com

7)




Volume = _____

8)



Volume = _____

9)



Volume = _____