
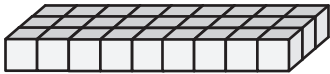


Volume | Counting Unit Cubes

Count the unit cubes and find the volume of each rectangular prism.

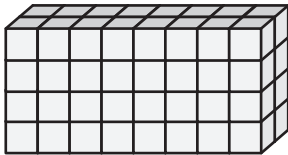
 = 1 in³

1)



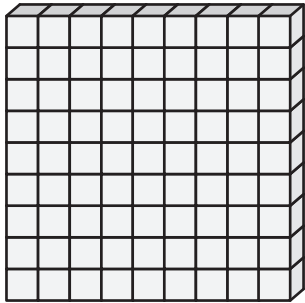
Volume = _____

2)



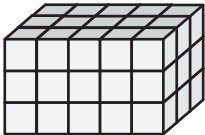
Volume = _____

3)



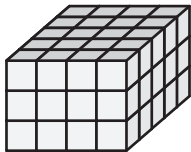
Volume = _____

4)



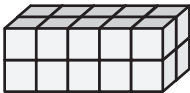
Volume = _____

5)




Volume = _____

6)




Volume = _____

7)




Volume = _____

8)



Volume = _____

9)



Volume = _____