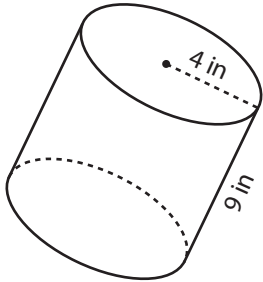


# Volume of a Cylinder

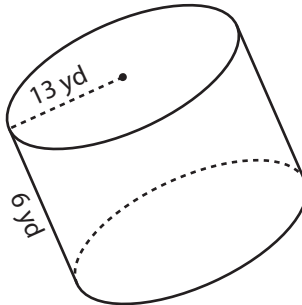
Find the volume of each cylinder. Round your answer to two decimal places. (Use 3.14 for  $\pi$ .)

1)



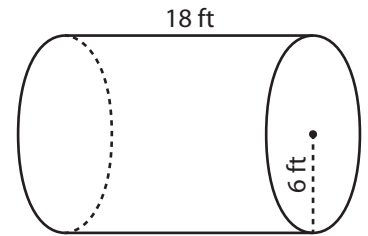
\_\_\_\_\_

2)



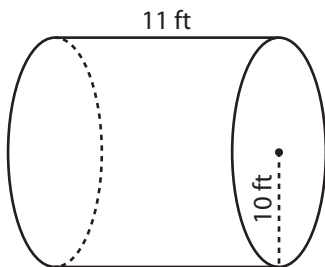
\_\_\_\_\_

3)



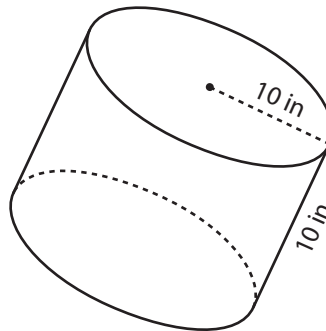
\_\_\_\_\_

4)



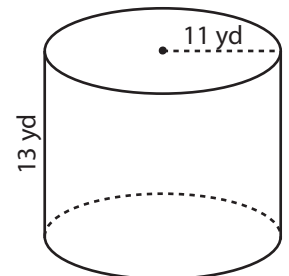
\_\_\_\_\_

5)



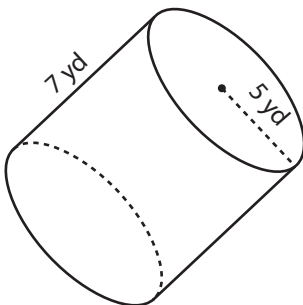
\_\_\_\_\_

6)



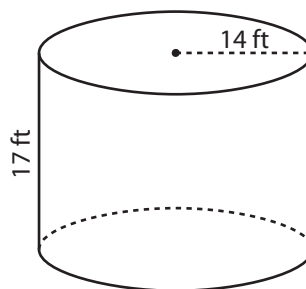
\_\_\_\_\_

7)



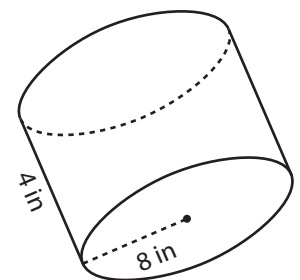
\_\_\_\_\_

8)



\_\_\_\_\_

9)



\_\_\_\_\_