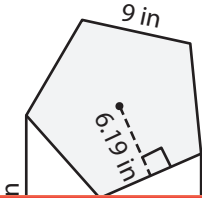


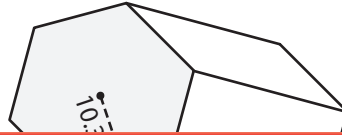
Volume of Mixed Prisms

Find the volume of each prism. Round your answer to two decimal places.

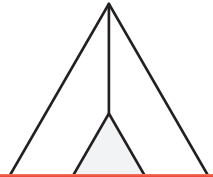
1)



2)



3)



Preview

Become a member to unlock
unrestricted access to both printable
and online worksheets.



www.tutoringhour.com

Volume = _____

Volume = _____

Volume = _____

- 4) A regular hexagonal prism has a length of 27 inches. The side length and the apothem of the base hexagon are 13 inches and 11.26 inches respectively. Determine the volume of the prism.
