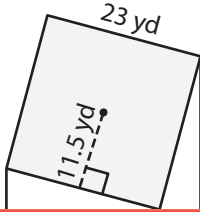


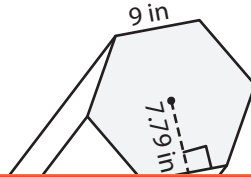
# Volume of Mixed Prisms

Find the volume of each prism. Round your answer to two decimal places.

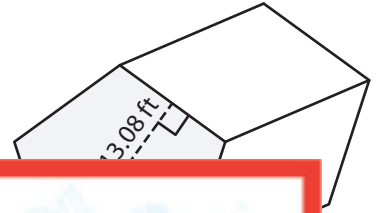
1)



2)



3)



## Preview

Become a member to unlock  
unrestricted access to both printable  
and online worksheets.



[www.tutoringhour.com](http://www.tutoringhour.com)

Volume = \_\_\_\_\_

Volume = \_\_\_\_\_

Volume = \_\_\_\_\_

- 4) A regular hexagonal prism has a length of 13 yards. The side length and the apothem of the base hexagon are 8 yards and 6.93 yards respectively. Find the volume of the prism.

\_\_\_\_\_