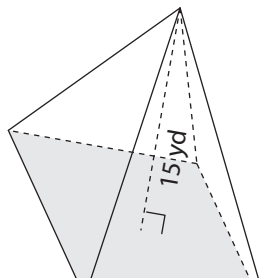


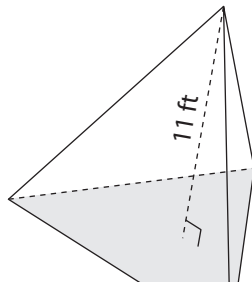
Volume of a Pyramid

Find the volume of each pyramid. Round your answer to two decimal places.

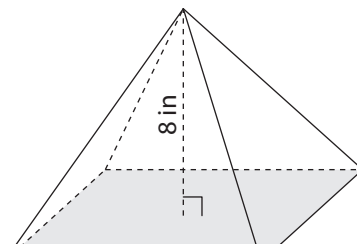
1) Base area = 74 yd^2



2) Base area = 137 ft^2



3) Base area = 111 in^2



Preview

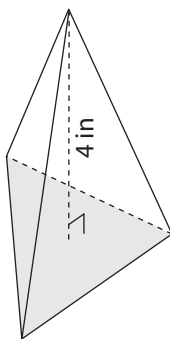
4) Base area = 125 yd^2

Become a member to unlock
unrestricted access to both printable
and online worksheets.

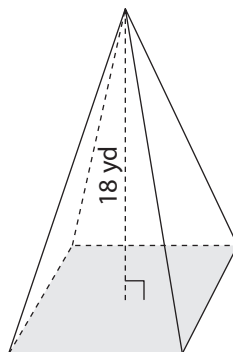


www.tutoringhour.com

7) Base area = 159 in^2



8) Base area = 125 yd^2



9) Base area = 89 ft^2

