

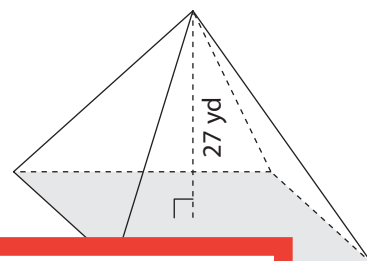
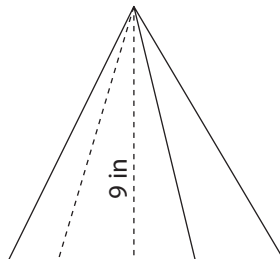
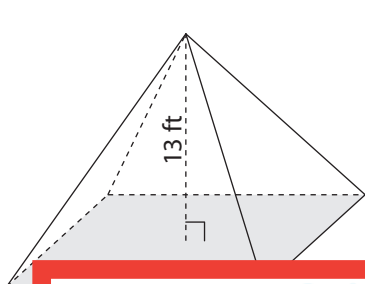
Volume of a Pyramid

Find the volume of each pyramid. Round your answer to two decimal places.

1) Base area = 74 ft^2

2) Base area = 143 in^2

3) Base area = 210 yd^2



Preview

4) Ba

Become a member to unlock
unrestricted access to both printable
and online worksheets.



www.tutoringhour.com

7) Base area = 134 yd^2

8) Base area = 237 ft^2

9) Base area = 180 in^2

