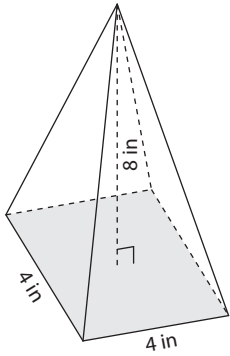


Volume of a Pyramid

Answer Key

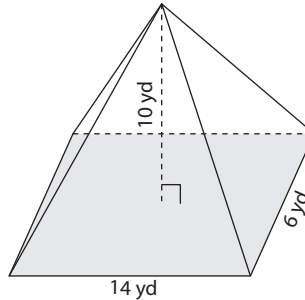
Find the volume of each pyramid. Round your answer to two decimal places.

1)



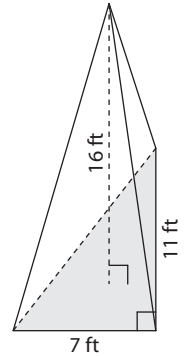
$$42.67 \text{ in}^3$$

2)



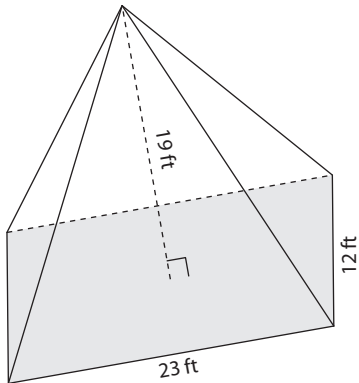
$$280 \text{ yd}^3$$

3)



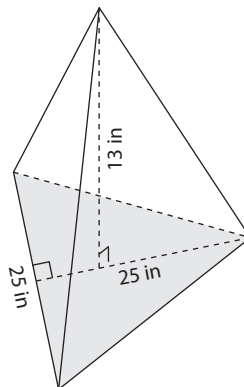
$$205.33 \text{ ft}^3$$

4)



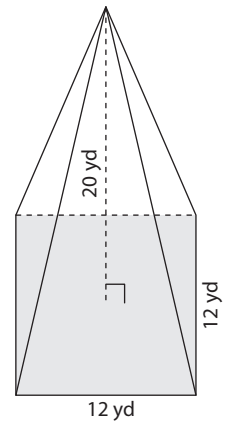
$$1,748 \text{ ft}^3$$

5)



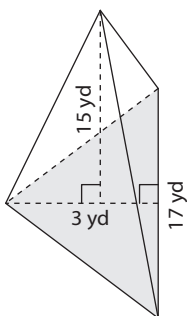
$$1,354.17 \text{ in}^3$$

6)



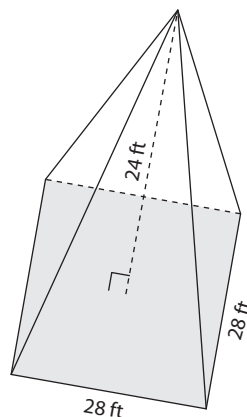
$$960 \text{ yd}^3$$

7)



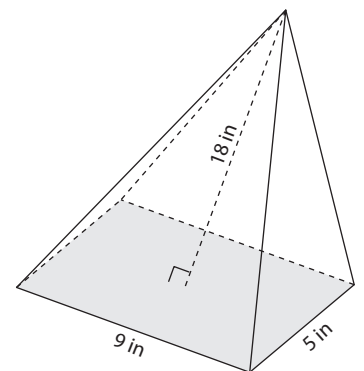
$$127.5 \text{ yd}^3$$

8)



$$6,272 \text{ ft}^3$$

9)



$$270 \text{ in}^3$$