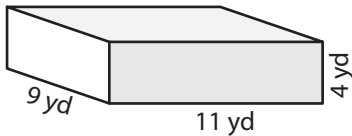


Volume of a Rectangular Prism

Answer Key

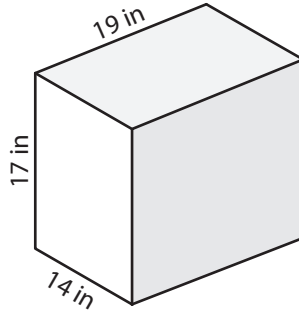
Find the volume of each rectangular prism.

1)



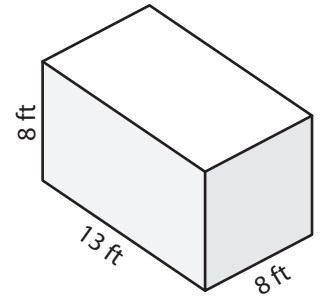
396 yd³

2)



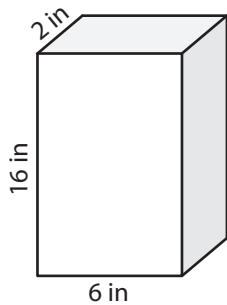
4,522 in³

3)



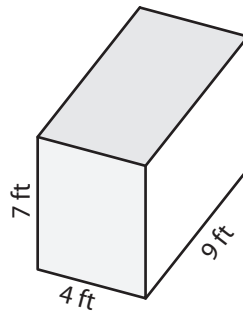
832 ft³

4)



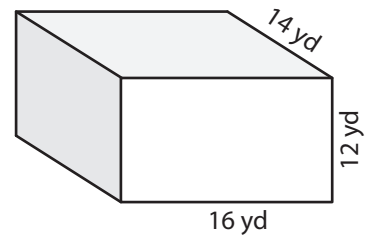
192 in³

5)



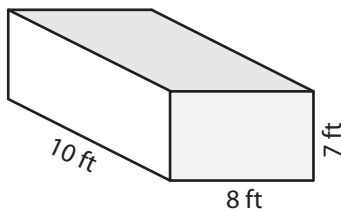
252 ft³

6)



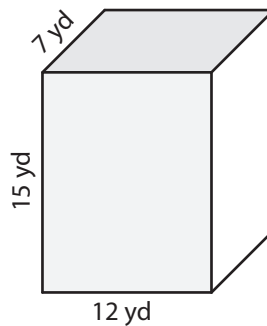
2,688 yd³

7)



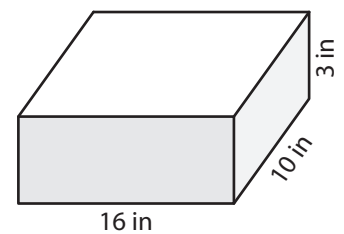
560 ft³

8)



1,260 yd³

9)



480 in³