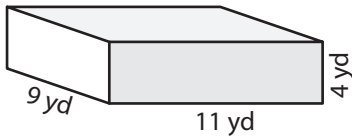


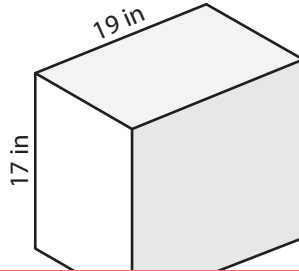
# Volume of a Rectangular Prism

Find the volume of each rectangular prism.

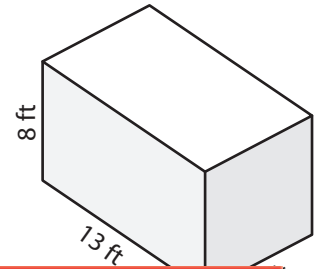
1)



2)



3)



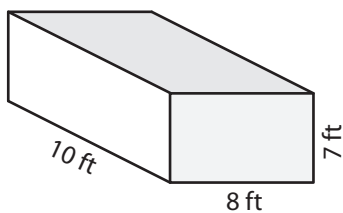
4)

## Preview

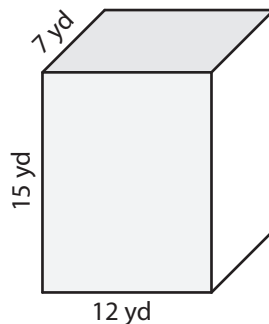
Become a member to unlock  
unrestricted access to both printable  
and online worksheets.

www.tutoringhour.com

7)



8)



9)

