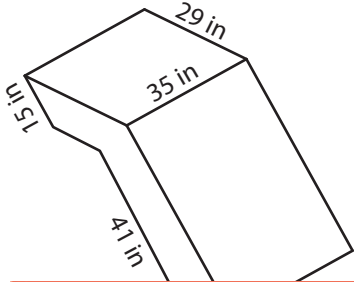


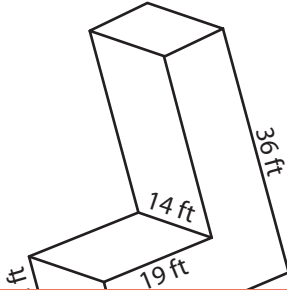
# Volume of a Rectangular Prism

Find the volume of each L - block.

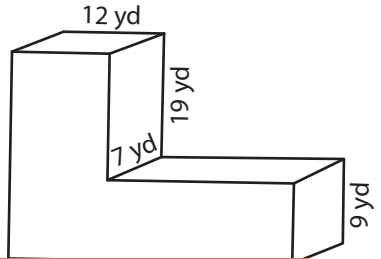
1)



2)



3)



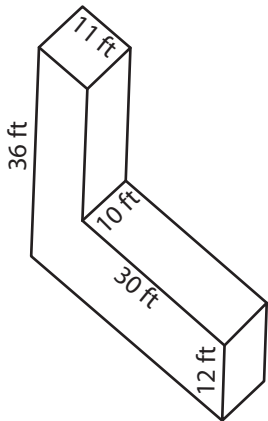
4)

## Preview

Become a member to unlock  
unrestricted access to both printable  
and online worksheets.

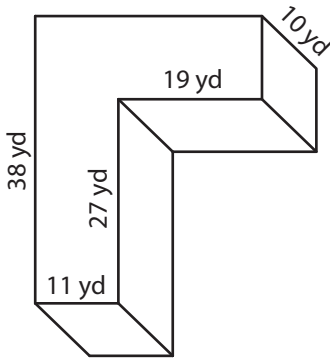
www.tutoringhour.com

7)



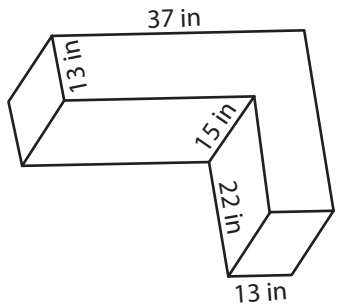
Volume = \_\_\_\_\_

8)



Volume = \_\_\_\_\_

9)



Volume = \_\_\_\_\_