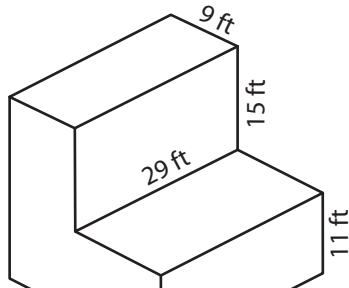


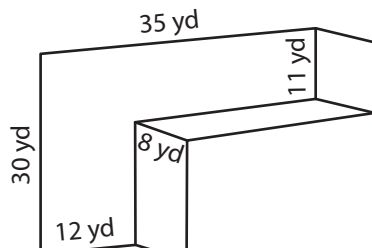
# Volume of a Rectangular Prism

Find the volume of each L - block.

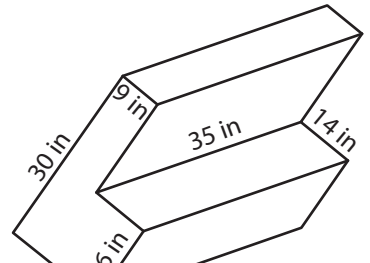
1)



2)



3)



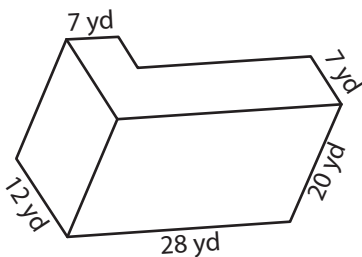
4)

# Preview

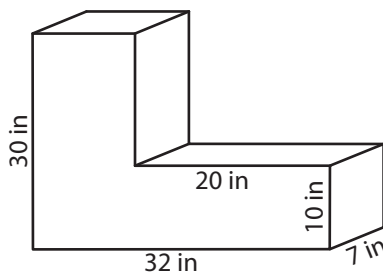
Become a member to unlock  
unrestricted access to both printable  
and online worksheets.

[www.tutoringhour.com](http://www.tutoringhour.com)

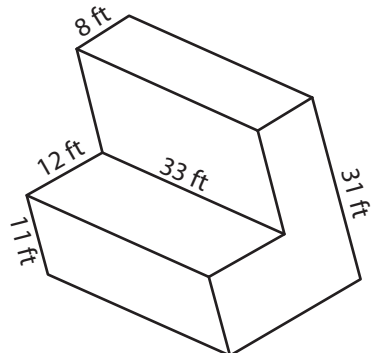
7)



8)



9)



Volume = \_\_\_\_\_

Volume = \_\_\_\_\_

Volume = \_\_\_\_\_