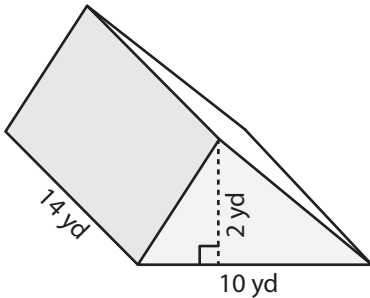


# Volume of a Triangular Prism

Answer Key

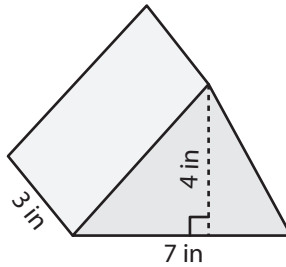
Find the volume of each triangular prism.

1)



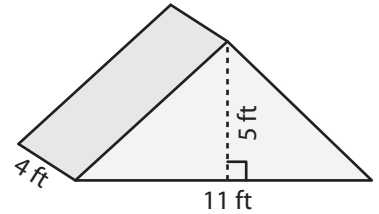
$$140 \text{ yd}^3$$

2)



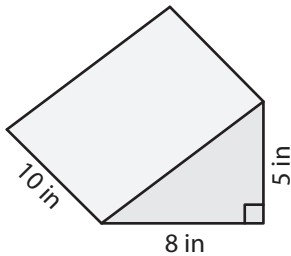
$$42 \text{ in}^3$$

3)



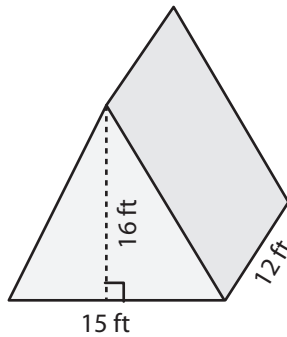
$$110 \text{ ft}^3$$

4)



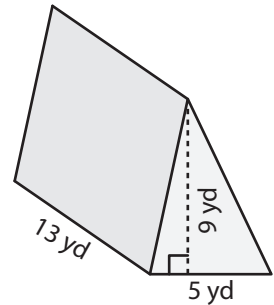
$$200 \text{ in}^3$$

5)



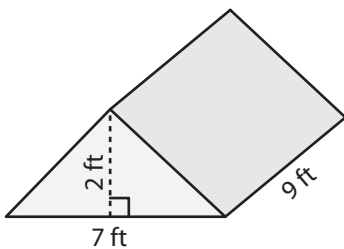
$$1,440 \text{ ft}^3$$

6)



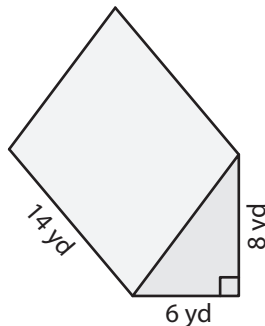
$$292.5 \text{ yd}^3$$

7)



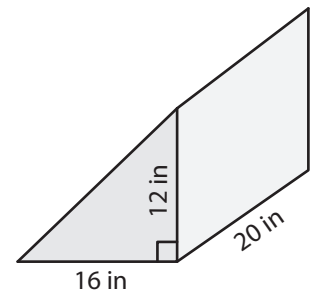
$$63 \text{ ft}^3$$

8)



$$336 \text{ yd}^3$$

9)



$$1,920 \text{ in}^3$$