


Measuring Weight | Customary Units

Calculate the weight of each individual object.

1)



=



Weight of each  = _____ lb

2)



=



Weight of each  = _____ oz

3)

Preview

Become a member to unlock
unrestricted access to both printable
and online worksheets.

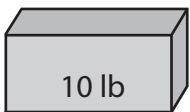


www.tutoringhour.com

4)

5)

6)

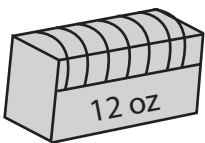


=

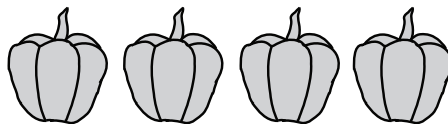


Weight of each  = _____ lb

7)



=



Weight of each  = _____ oz