



# Measuring Weight | KG and G

Measure the weight of each object.

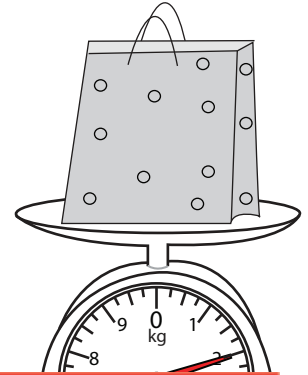
1)



2)



3)



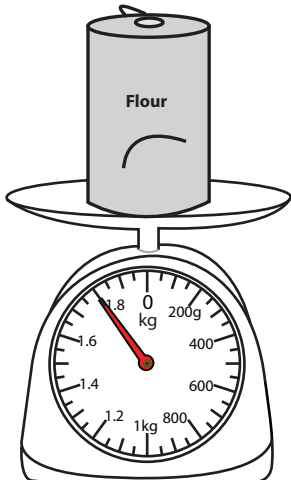
4)

# Preview

Become a member to unlock  
unrestricted access to both printable  
and online worksheets.

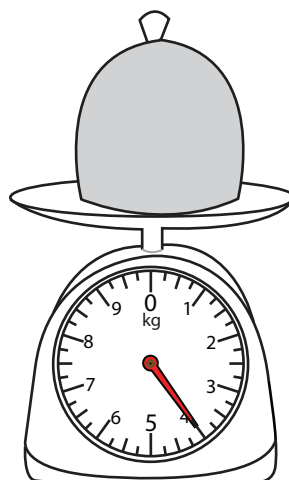
[www.tutoringhour.com](http://www.tutoringhour.com)

7)



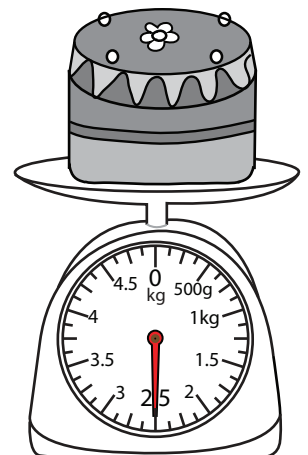
\_\_\_\_\_ kg

8)



\_\_\_\_\_ kg

9)



\_\_\_\_\_ kg