



# Measuring Weight | KG and G

Measure the weight of each object.


1)



2)



3)



4)


## Preview

Become a member to unlock  
unrestricted access to both printable  
and online worksheets.



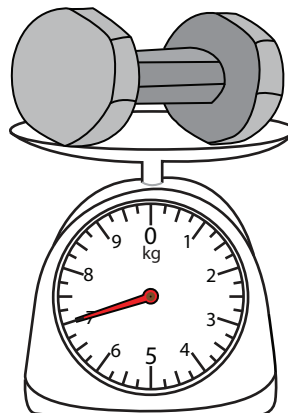
[www.tutoringhour.com](http://www.tutoringhour.com)

7)




\_\_\_\_\_ g

8)



\_\_\_\_\_ kg

9)



\_\_\_\_\_ kg