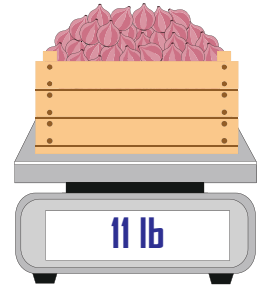
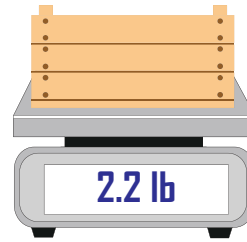


# Measuring Weight | Customary Units

- 1) Jaden finds the weight of an empty crate.  
He then fills the crate with onions.  
What is the weight of the onions?



The weight of the onions: \_\_\_\_\_

- 2) Aunt Sally measures the weight of an empty box.



- 3) Zoey measures the weight of an empty box.  
What is the weight of the teddy bears?
- 4) Olivia measures the weight of a teddy bear.  
What is the weight of the teddy bears?


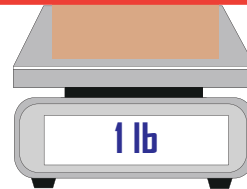
**Preview**

Become a member to unlock  
unrestricted access to both printable  
and online worksheets.



[www.tutoringhour.com](http://www.tutoringhour.com)



The weight of the teddy bears: \_\_\_\_\_



- 5) Rachel measures the weight of an empty basket.  
She then fills the basket with lemons.  
What is the weight of the lemons?



The weight of the lemons: \_\_\_\_\_