



Measuring Weight | Metric Units

- 1) Fiona finds the weight of an empty bird feeder.
She then fills it with bird seeds.
What is the weight of the seeds?



The weight of the seeds: _____

- 2) Naomi measures the weight of an empty carton

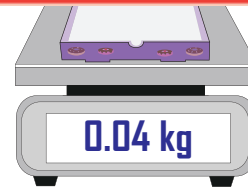
Preview

Become a member to unlock
unrestricted access to both printable
and online worksheets.

www.tutoringhour.com


- 3) D
H
W
T
4) J
H

What is the weight of the donuts?



The weight of the donuts: _____

- 5) Clara wants to pack some cookies in a jar.
She measures the weight of an empty jar and
then fills the jar with cookies.
What is the weight of the cookies?



The weight of the cookies: _____